

ESCOLA SECUNDÁRIA DE EMÍDIO NAVARRO

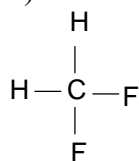
Nomenclatura de alcanos e derivados halogenados

1 – Escreve a fórmula de estrutura dos seguintes compostos.

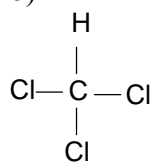
- 2-bromopropano
- metilpropano
- bromoetano
- 1,2-difluoro-1,1,2,2-tetracloroetano
- 1,1,2-tricloroetano
- 4-etil-2,2-dimetil-heptano
- 3,4-dimetil-heptano
- 2-bromo-1-cloro-1-fluoroetano
- 3-bromo-2-cloropentano
- 1,1-difluoro-4-cloro-2-metil-hexano

2 – Escreve o nome IUPAC dos seguintes compostos.

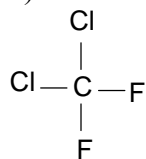
a)



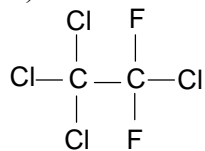
b)



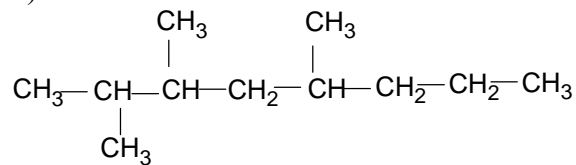
c)



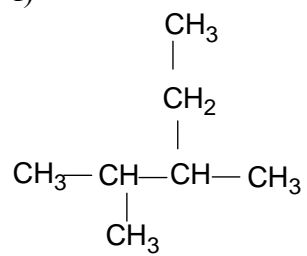
d)



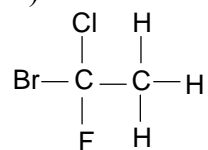
e)



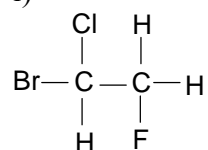
f)



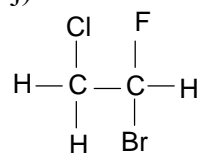
h)



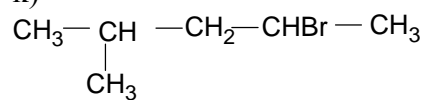
i)



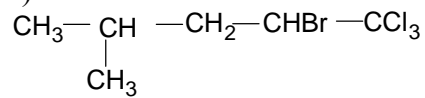
j)



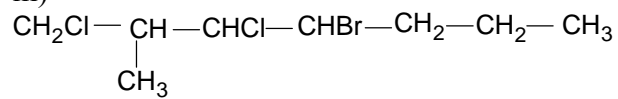
k)



l)



m)



n)

